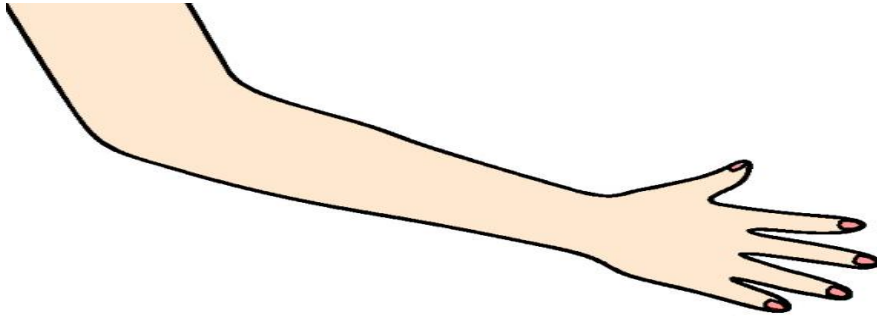


# Estimation Station

1. How many of these.....



To make this?

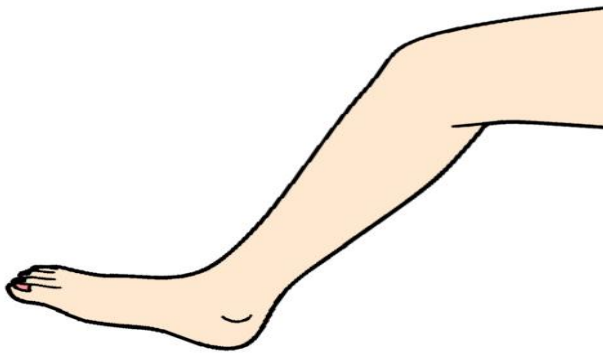


Estimate: \_\_\_\_\_ Actual Measure: \_\_\_\_\_

2. How many of these.....



To make this?



Estimate: \_\_\_\_\_ Actual Measure: \_\_\_\_\_

3. How many of these.....



To make this?




Estimate: \_\_\_\_\_ Actual Measure: \_\_\_\_\_

4. How many of these.....



To make this?



Estimate: \_\_\_\_\_ Actual Measure: \_\_\_\_\_